


# Mathematik / Grundrechenarten


Matheaufgaben für die 1. Klasse: Additionsaufgabe finden bis 10

Zähle die Bilder und finde die Aufgabe:

1




$$9 = \_ + \_$$

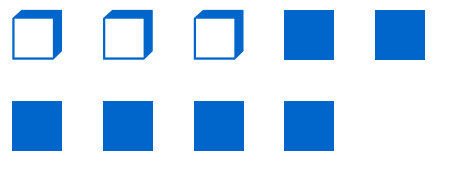


$$9 = \_ + \_$$

2




$$9 = \_ + \_$$

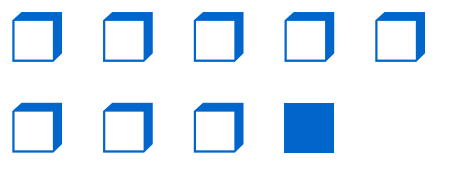


$$9 = \_ + \_$$

3

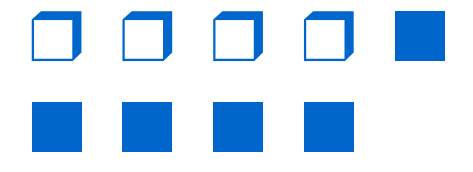


$$9 = \_ + \_$$

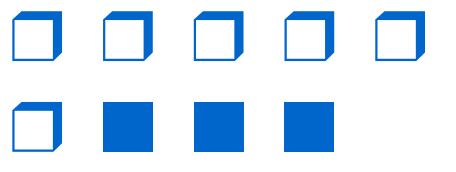


$$9 = \_ + \_$$

4



$$9 = \_ + \_$$



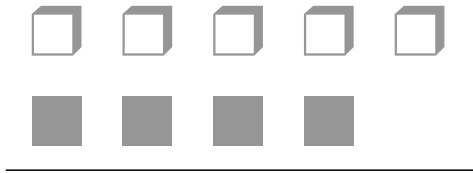
$$9 = \_ + \_$$

# Mathematik / Grundrechenarten


Matheaufgaben für die 1. Klasse: Additionsaufgabe finden bis 10

## Lösungen

①




$$9 = 5 + 4$$




$$9 = 7 + 2$$

②




$$9 = 1 + 8$$




$$9 = 3 + 6$$

③




$$9 = 2 + 7$$




$$9 = 8 + 1$$

④



$$9 = 4 + 5$$



$$9 = 6 + 3$$