


# Mathematik / Grundrechenarten

Matheaufgaben für Klasse 2: Multiplikation bis 20


Finde die 2 Aufgaben, die zu jedem Bild gehören:

1



---


$$2 \cdot 9 = 9 \cdot 2 = 18$$



---

$$\_ \cdot \_ = \_ \cdot \_ = \_$$

2



---

$$\_ \cdot \_ = \_ \cdot \_ = \_$$



---


$$\_ \cdot \_ = \_ \cdot \_ = \_$$

3



---


$$\_ \cdot \_ = \_ \cdot \_ = \_$$



---

$$\_ \cdot \_ = \_ \cdot \_ = \_$$

4



---

$$\_ \cdot \_ = \_ \cdot \_ = \_$$



---


$$\_ \cdot \_ = \_ \cdot \_ = \_$$

# Mathematik / Grundrechenarten


## Matheaufgaben für Klasse 2: Multiplikation bis 20

### Lösungen

①




$$2 \cdot 9 = 9 \cdot 2 = 18$$



$$3 \cdot 6 = 6 \cdot 3 = 18$$

②



$$3 \cdot 5 = 5 \cdot 3 = 15$$




$$2 \cdot 8 = 8 \cdot 2 = 16$$

③




$$2 \cdot 10 = 10 \cdot 2 = 20$$




$$3 \cdot 4 = 4 \cdot 3 = 12$$

④



$$4 \cdot 5 = 5 \cdot 4 = 20$$



$$2 \cdot 6 = 6 \cdot 2 = 12$$