


Mathematik / Grundrechenarten


Matheaufgaben für die 1. Klasse: Subtrahieren bis 10

Schau Dir die Bilder an, sie geben die Aufgabe vor:

1

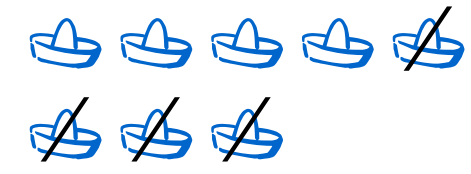


$$\underline{\quad} - \underline{\quad} = \underline{\quad}$$



$$\underline{\quad} - \underline{\quad} = \underline{\quad}$$

2



$$\underline{\quad} - \underline{\quad} = \underline{\quad}$$

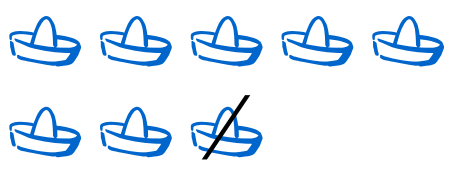


$$\underline{\quad} - \underline{\quad} = \underline{\quad}$$

3

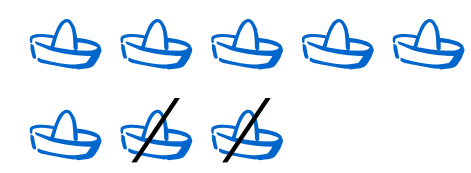


$$\underline{\quad} - \underline{\quad} = \underline{\quad}$$



$$\underline{\quad} - \underline{\quad} = \underline{\quad}$$

4



$$\underline{\quad} - \underline{\quad} = \underline{\quad}$$



$$\underline{\quad} - \underline{\quad} = \underline{\quad}$$

Mathematik / Grundrechenarten

Matheaufgaben für die 1. Klasse: Subtrahieren bis 10

Lösungen

①



$$8 - 5 = 3$$



$$8 - 3 = 5$$

②



$$8 - 4 = 4$$



$$8 - 8 = 0$$

③



$$8 - 7 = 1$$



$$8 - 1 = 7$$

④



$$8 - 2 = 6$$



$$8 - 6 = 2$$